







Adding Gems

Let's say that ...

 = 50	 = 30	 = 25
 = 15	 = 8	 = 5

Can you help complete the equations and find the score?

- 1)  +  +  =
- 2)   +   +  =
- 3)    +  +  =
- 4)    +    +   =
- 5)  +    +  =

6) Come up with 2 equations using gems and let your friends solve them!

Bonus!

Look at this turban ornament created in North India in the 19th century.

If it has 20 diamonds  and 30 emeralds  What is the total score?

